


**Intensive Part-Writing and Analysis**  
**Assignment #5 – due Monday, Sept. 17<sup>th</sup>, 10:00 am**


Name:

1. Read pages 47-50 in GRIT.
2. Below the staff, label each chord with the correct roman numeral and inversion number (be sure to include the key). Above the staff, supply the correct chord symbols (be sure to use slash chords when needed).




A musical staff in treble clef with a key signature of two sharps (F# and C#) and a common time signature (C). The staff contains four measures of music. The first measure has a whole note chord. The second measure has a whole note chord. The third measure has a whole note chord. The fourth measure has a whole note chord. The notes in the chords are: Measure 1: F#, C#, G, C; Measure 2: F#, C#, G, C; Measure 3: F#, C#, G, C; Measure 4: F#, C#, G, C.

3. Below the staff, supply the correct roman numeral analysis for this excerpt. Be sure to include the correct key (don't be fooled by the "incorrect" key signature).



A musical staff in treble clef with a key signature of one flat (Bb) and a 3/8 time signature. The staff contains four measures of music. The first measure has a quarter note chord. The second measure has a quarter note chord. The third measure has a quarter note chord. The fourth measure has a quarter note chord. The notes in the chords are: Measure 1: F, C, G; Measure 2: F, C, G; Measure 3: F, C, G; Measure 4: F, C, G.



A musical staff in treble clef with a key signature of one flat (Bb) and a 3/8 time signature. The staff contains four measures of music. The first measure has a quarter note chord. The second measure has a quarter note chord. The third measure has a quarter note chord. The fourth measure has a quarter note chord. The notes in the chords are: Measure 1: F, C, G; Measure 2: F, C, G; Measure 3: F, C, G; Measure 4: F, C, G.

4. Below the staff, supply the correct key and roman numeral analysis for this figured bass. Then add the alto and tenor parts, remembering to use good smooth voice-leading.

5. Supply a roman numeral analysis for the following figured bass (including the key). Then add the other three voices in four-part SATB style.

6. Harmonize the following unfigured bass using root position and first inversion triads only. Place the roman numerals below the staff and be sure to include the key.

7. Label the following chords with correct chord symbols.

8